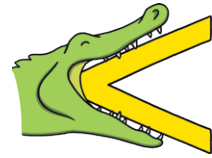
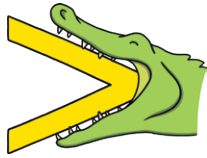






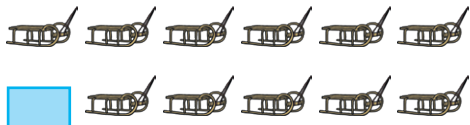




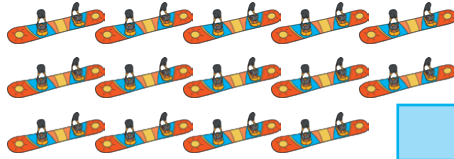












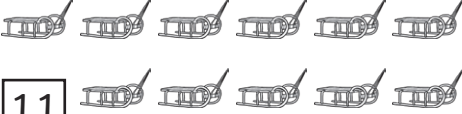










Greater Than or Less Than

Count the winter-themed objects in each box. Then, draw the correct symbol in the middle box to show which is greater. Remember – the crocodile always wants to eat the bigger number. The first one has been done for you.



| | | |
|--|---|---|
|  <input type="text" value="8"/> |  |  <input type="text" value="12"/> |
|  <input type="text"/> | |  <input type="text"/> |
|  <input type="text"/> | |  <input type="text"/> |
|  <input type="text"/> | |  <input type="text"/> |
|  <input type="text"/> | |  <input type="text"/> |
|  <input type="text"/> | |  <input type="text"/> |
|  <input type="text"/> | |  <input type="text"/> |
|  <input type="text"/> | |  <input type="text"/> |

Greater Than or Less Than Answers

| | | |
|---|---|--|
|  <div style="float: right; border: 1px solid black; padding: 2px 5px;">8</div> | > | <div style="float: right; border: 1px solid black; padding: 2px 5px;">12</div>  |
|  <div style="float: right; border: 1px solid black; padding: 2px 5px;">10</div> | > | <div style="float: right; border: 1px solid black; padding: 2px 5px;">14</div>  |
|  <div style="float: right; border: 1px solid black; padding: 2px 5px;">15</div> | > | <div style="float: right; border: 1px solid black; padding: 2px 5px;">11</div>  |
|  <div style="float: right; border: 1px solid black; padding: 2px 5px;">20</div> | > | <div style="float: right; border: 1px solid black; padding: 2px 5px;">16</div>  |
|  <div style="float: right; border: 1px solid black; padding: 2px 5px;">12</div> | > | <div style="float: right; border: 1px solid black; padding: 2px 5px;">9</div>  |
|  <div style="float: right; border: 1px solid black; padding: 2px 5px;">14</div> | > | <div style="float: right; border: 1px solid black; padding: 2px 5px;">17</div>  |
|  <div style="float: right; border: 1px solid black; padding: 2px 5px;">19</div> | > | <div style="float: right; border: 1px solid black; padding: 2px 5px;">10</div>  |
|  <div style="float: right; border: 1px solid black; padding: 2px 5px;">13</div> | > | <div style="float: right; border: 1px solid black; padding: 2px 5px;">18</div>  |